

Solve each problem.

Ex) Express the triangles as a fraction of the entire set.



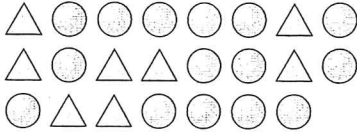
1) Express the stars as a fraction of the entire set.



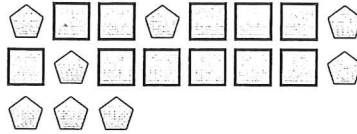
Answers

Ex.  $\frac{2}{8}$

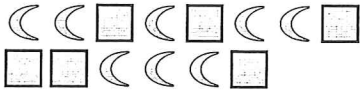
2) Express the circles as a fraction of the entire set.




3) Express the squares as a fraction of the entire set.



4) Express the squares as a fraction of the entire set.




5) Express the stars as a fraction of the entire set.



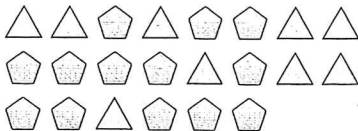
6) Express the hearts as a fraction of the entire set.



7) Express the pentagons as a fraction of the entire set.



8) Express the pentagons as a fraction of the entire set.



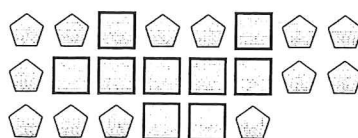
9) Express the squares as a fraction of the entire set.



10) Express the squares as a fraction of the entire set.



11) Express the squares as a fraction of the entire set.



1. \_\_\_\_\_

2. \_\_\_\_\_

3. \_\_\_\_\_

4. \_\_\_\_\_

5. \_\_\_\_\_

6. \_\_\_\_\_

7. \_\_\_\_\_

8. \_\_\_\_\_

9. \_\_\_\_\_

10. \_\_\_\_\_

11. \_\_\_\_\_